



Maths
Leaving Certificate
Ordinary Level

Past Exam Questions on
Statistics and Data

Q7 2013 Paper 2 Project Maths Section B**Question 7****(75 marks)**

The table below shows the rates of births, marriages and deaths in Ireland from 1990 to 2010. The rates are per 10 000 of the estimated population.

Number of Births, Marriages and Deaths in Ireland (per 10 000 of the estimated population)			
Year	Births	Marriages	Deaths
1990	151	51	90
1991	150	49	89
1992	144	47	87
1993	138	47	90
1994	135	46	86
1995	135	43	90
1996	140	45	87
1997	144	43	86
1998	146	45	85
1999	144	50	87
2000	145	51	83
2001	150	50	79
2002	155	52	76
2003	155	51	73
2004	153	52	71
2005	148	52	68
2006	154	52	67
2007	163	52	64
2008	168	50	63
2009	167	48	63
2010	165	46	61

(Source: Central Statistics Office, <http://www.cso.ie>)

Q1 **2012 Project Maths Paper Two Sample Paper Section A**

Answer **all five** questions from this section.

Question 1

(25 marks)

The size, mean and standard deviation of four sets of data A, B, C and D are given in this table:

	A	B	C	D
size (N)	1000	100	100	10
mean (μ)	10	100	1000	100
standard deviation (σ)	20	30	20	10

Complete the sentences below by inserting the relevant letter in each space:

- (a) The set that contains more numbers than any other is ____ and the set that contains fewer numbers than any other is ____.
- (b) On average, the data in set ____ are the biggest numbers and the data in set ____ are the smallest numbers.
- (c) The data in set ____ are more spread out than the data in the other sets.
- (d) The set that **must** contain some negative numbers is set ____.
- (e) If the four sets are combined, the median is most likely to be a value in set ____.

Q 7 2012 Paper Two Ordinary level Section B

Question 7

(75 marks)

The following table gives data on new private cars sold in Ireland in each quarter of each year from 2006 to 2011.

New private cars sales								
Year	Number of cars sold					Engine type of cars sold		
	January to March	April to June	July to Sept.	October to Dec.	Annual Total	Petrol	Diesel	Other
2006	75 769	54 572	32 873	10 059	173 273	128 634	44 010	629
2007	81 750	57 124	32 418	9 462	180 754	128 346	50 560	1 848
2008	77 441	37 128	27 361	4 540	146 470	92 298	50 283	3 889
2009	27 140	15 225	9 049	3 018	54 432	22 802	30 645	985
2010	34 555	26 806	17 011	6 535	84 907	27 124	53 998	3 785
2011	39 484	29 770	13 467	4 211	86 932	23 246	61 730	1 956

(Source: Central Statistics Office, <http://www.cso.ie>)


- (a) (i)** Show the *annual total* sales of cars over the six years, using a suitable chart.

- (ii)** Find the mean number of cars sold per year over the six years.


- (d) A survey of some of the most popular models of private cars sold in 2011 examined the CO₂ emissions in g/km from diesel engines and petrol engines. The data are as follows:

Diesel engines	Petrol engines
117, 125, 120, 125, 134, 110,	139, 133, 150, 157, 138, 159,
118, 114, 119, 119, 116, 107.	129, 138, 134, 129, 129, 136.

- (i) Construct a back-to-back stem-and-leaf plot of the above data.



- (ii) Does the information suggest that diesel engines produce lower CO₂ emissions than petrol engines? In your answer you should refer to the stem-and-leaf plot and to an appropriate measure of central tendency.



- (iii) Does the information suggest that there is a greater variation in the CO₂ emissions of diesel engines than petrol engines? In your answer you should refer to the stem-and-leaf plot and an appropriate measure of variability.



Question 7

(75 marks)

The *King of the Hill* triathlon race in Kinsale consists of a 750 metre swim, followed by a 20 kilometre cycle, followed by a 5 kilometre run.

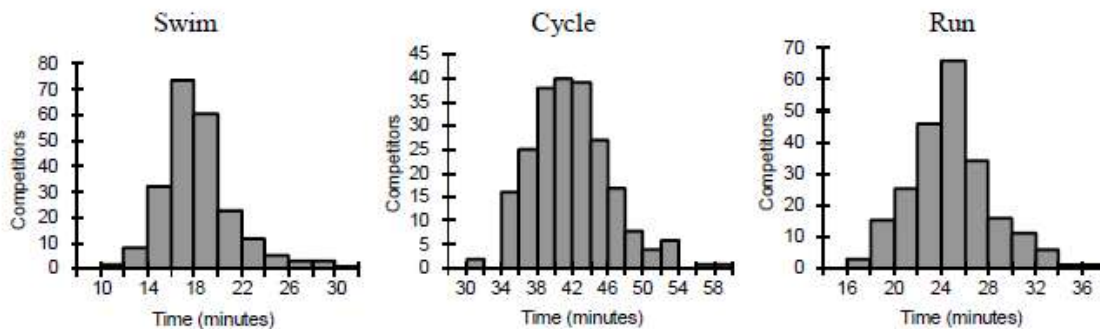
The questions below are based on data from 224 athletes who completed this triathlon in 2010.

Máire is analysing data from the race, using statistical software. She has a data file with each competitor's time for each part of the race, along with various other details of the competitors.



Lizzie Lee, winner of the women's event

Máire produces histograms of the times for the three events. Here are the three histograms.



(a) Use the histograms to complete the following sentences:

- (i) The event that, on average, takes longest to complete is the _____.
- (ii) In all three histograms, the times are grouped into intervals of _____ minutes.
- (iii) The time of the fastest person in the swim was between _____ and _____ minutes.
- (iv) The median time for the run is approximately _____ minutes.
- (v) The event in which the times are most spread out is the _____.

